

Please write clearly in block capitals.

Centre number

--	--	--	--	--

Candidate number

--	--	--	--

Surname

Forename(s)

Candidate signature

GCSE MATHEMATICS (LINEAR)

H

Higher Tier Paper 2

Friday 6 November 2015

Morning

Time allowed: 2 hours

Materials

For this paper you must have:

- a calculator
- mathematical instruments.



Instructions

- Use black ink or black ball-point pen. Draw diagrams in pencil.
- Answer **all** questions.
- You must answer the questions in the spaces provided. Do not write outside the box around each page or on blank pages.
- Do all rough work in this book.

Information

- The marks for questions are shown in brackets.
- The maximum mark for this paper is 105.
- The quality of your written communication is specifically assessed in Questions 4 and 15. These questions are indicated with an asterisk (*).
- You may ask for more answer paper, tracing paper and graph paper. These must be tagged securely to this answer book.

Advice

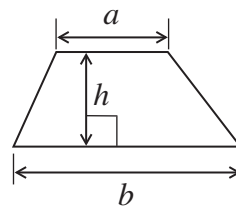
- In all calculations, show clearly how you work out your answer.



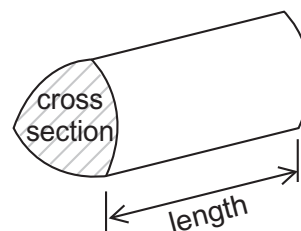
N 0 V 1 5 4 3 6 5 2 H 0 1

Formulae Sheet: Higher Tier

Area of trapezium = $\frac{1}{2}(a+b)h$

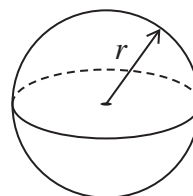


Volume of prism = area of cross section \times length



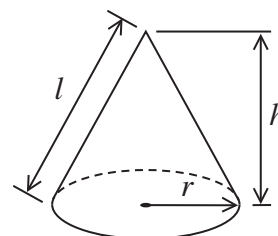
Volume of sphere = $\frac{4}{3}\pi r^3$

Surface area of sphere = $4\pi r^2$



Volume of cone = $\frac{1}{3}\pi r^2 h$

Curved surface area of cone = $\pi r l$

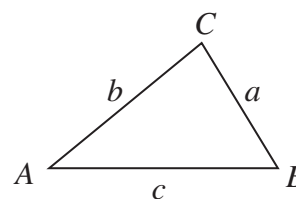


In any triangle ABC

Area of triangle = $\frac{1}{2}ab \sin C$

Sine rule $\frac{a}{\sin A} = \frac{b}{\sin B} = \frac{c}{\sin C}$

Cosine rule $a^2 = b^2 + c^2 - 2bc \cos A$



The Quadratic Equation

The solutions of $ax^2 + bx + c = 0$, where $a \neq 0$, are given by

$$x = \frac{-b \pm \sqrt{b^2 - 4ac}}{2a}$$

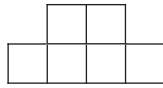


Answer **all** questions in the spaces provided.

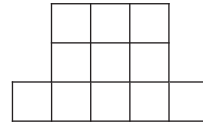
1 Here is a sequence of patterns made with squares.



Pattern 1



Pattern 2



Pattern 3

The rule for working out the number of squares in each pattern is

Square the pattern number and then add 2

1 (a) How many squares are in pattern 7?

[1 mark]

.....
.....

Answer

1 (b) Which pattern has 123 squares?

[2 marks]

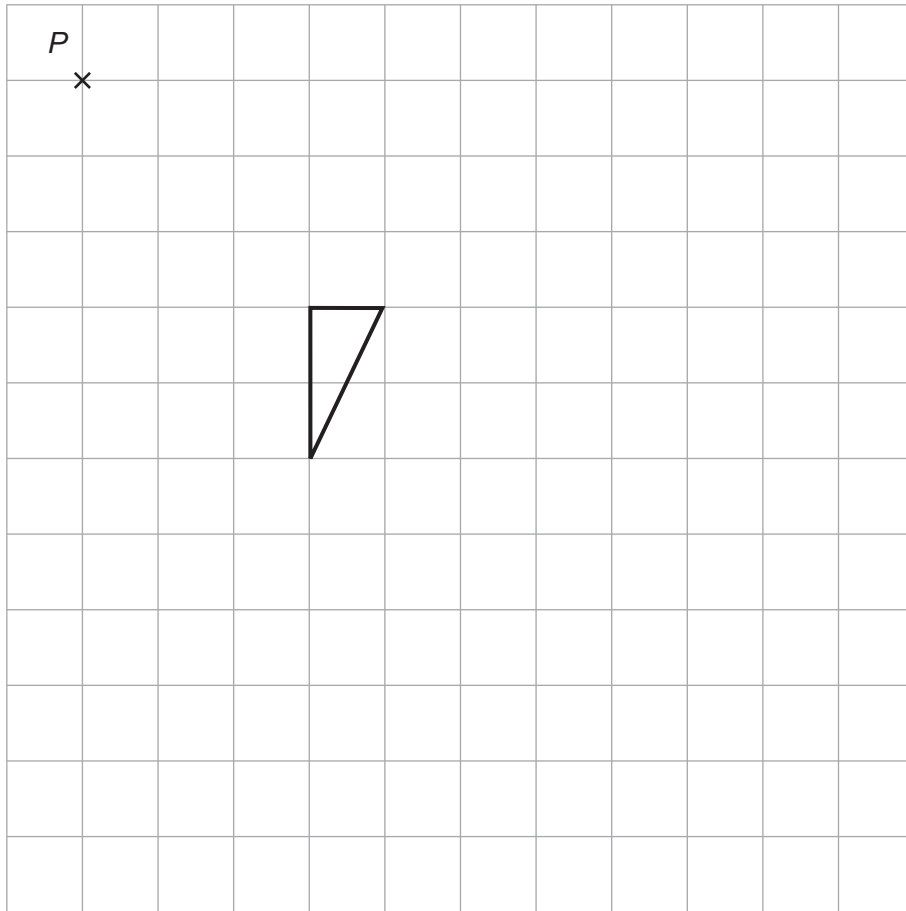
.....
.....

Answer



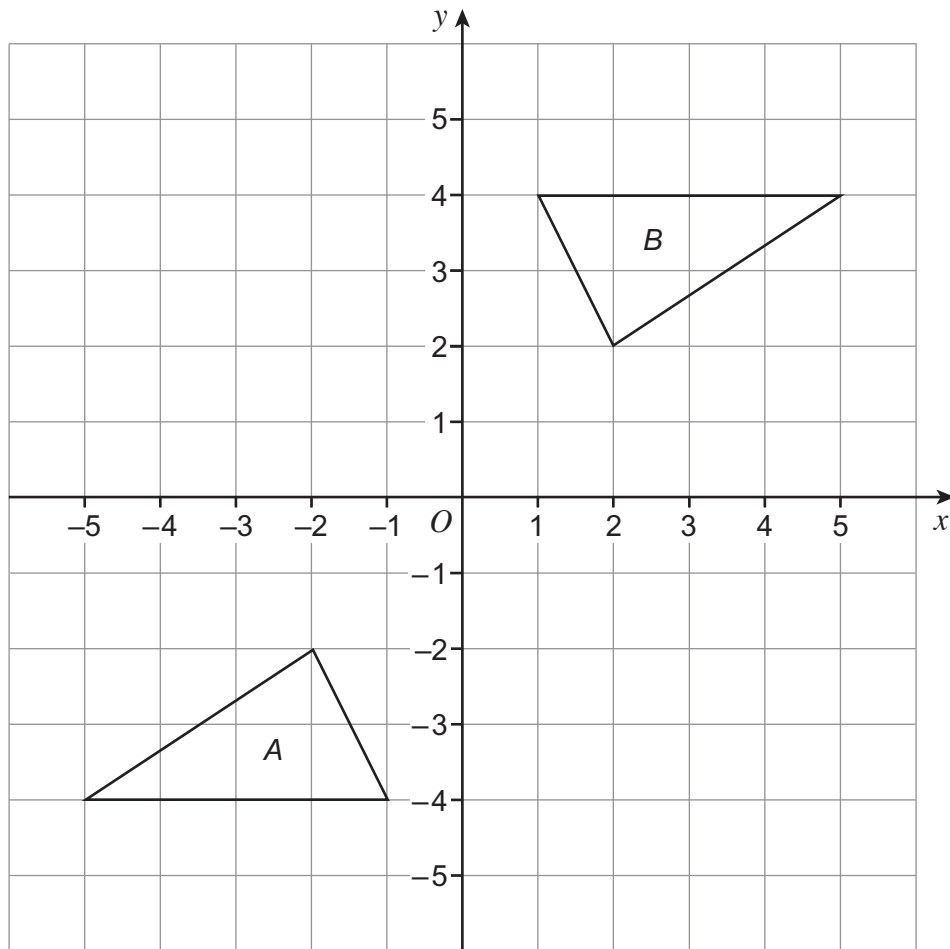
2 (a) Enlarge the triangle by scale factor 2, using point P as the centre of enlargement.

[3 marks]



2 (b) Describe fully the **single** transformation that maps shape *A* onto shape *B*.

[3 marks]



.....

.....



3 A family uses 300 units of gas.

Each unit of gas costs 19p without VAT.
VAT of 5% is added to the bill.

Work out the total gas bill.

[4 marks]

.....

.....

.....

.....

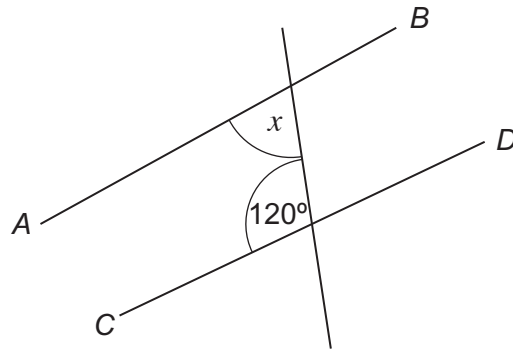
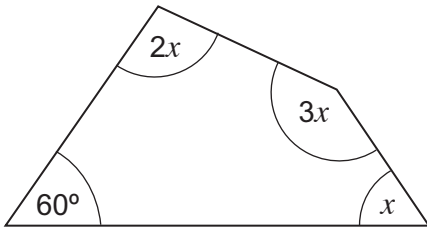
.....

.....

Answer £



*4

Not drawn
accurately

Show that AB is **not** parallel to CD .

[4 marks]

.....

.....

.....

.....

.....

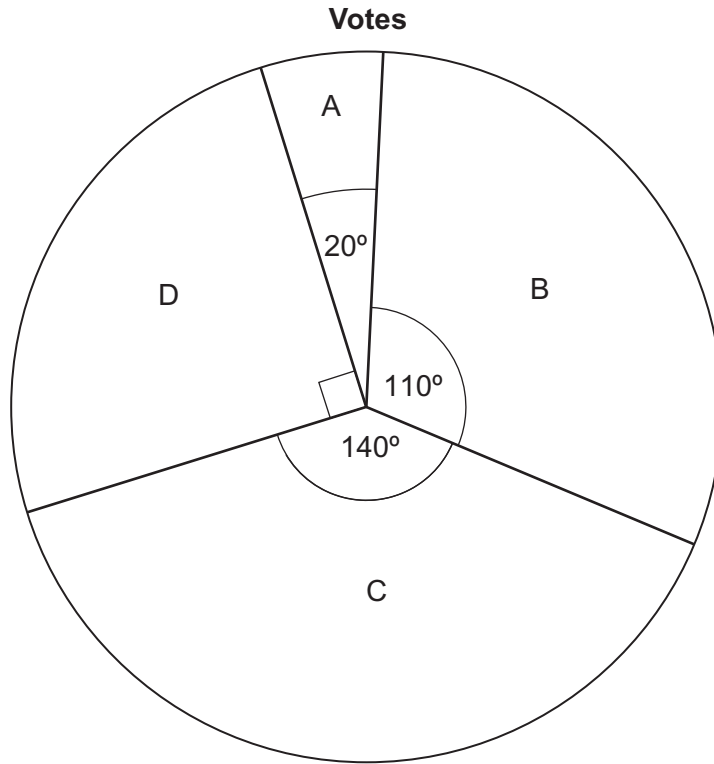
.....

Turn over for the next question

Turn over ►



5 The pie chart shows information about how people voted in an election.



1800 people voted for D.

How many **more** people voted for C than B?

[3 marks]

.....

.....

.....

.....

.....

Answer



6 (a) Solve $6x + 4 = 2(2x - 5)$

[3 marks]

.....
.....
.....

$x =$

6 (b) Multiply out $y(2 - y^3)$

[2 marks]

.....

Answer

7 Abby and Judy share some money.
Abby gets 25%

7 (a) Write Abby's share : Judy's share as a ratio.
Give your answer in its simplest form.

[2 marks]

.....
.....

Answer :

7 (b) Judy gets £19.50

How much does Abby get?

[2 marks]

.....
.....
.....

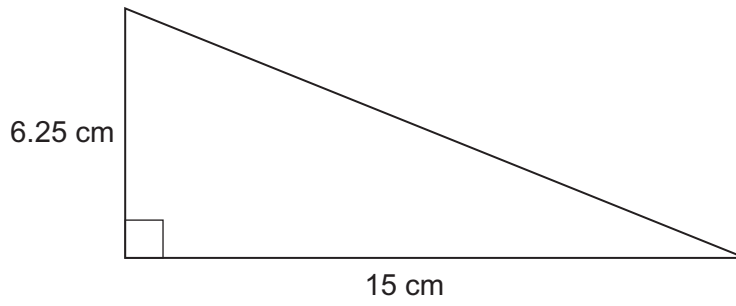
Answer £

12

Turn over ►



8 Work out the length of the hypotenuse.



Not drawn accurately

[3 marks]

.....

.....

.....

Answer cm



9 Here is information about the scores, t , of class A in a test.

Score	Frequency		
$0 < t \leq 10$	4		
$10 < t \leq 20$	8		
$20 < t \leq 30$	9		
$30 < t \leq 40$	3		
$40 < t \leq 50$	1		

The mean score for class B in the same test is 22

Dan says, "On average, class A did better than class B."

Is he correct?
You **must** show your working.

[4 marks]

.....

.....

.....

.....

.....

.....

Answer

7

Turn over ►



10 a and b are different prime numbers with $a > b$

10 (a) Give an example to show that $a^2 + b^2$ could be even.

[1 mark]

.....

.....

.....

10 (b) Give an example to show that $a^2 + b^2$ could be odd.

[1 mark]

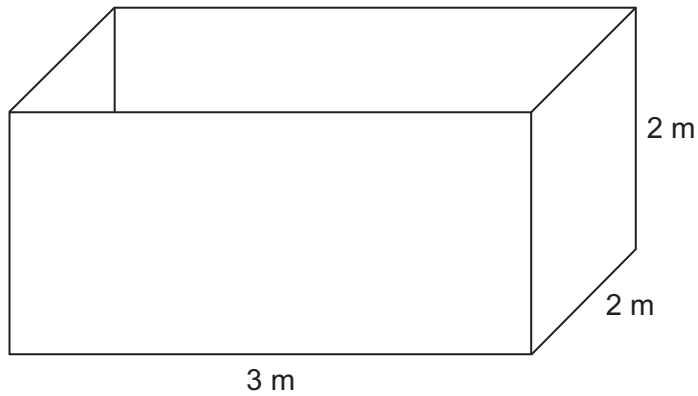
.....

.....

.....



11 An empty tank is in the shape of a cuboid as shown.



The tank is to be filled with water at 1.25 litres per second.

$1 \text{ m}^3 = 1000 \text{ litres}$

Work out the time taken to fill the tank.
Give your answer in hours and minutes.

[5 marks]

.....

.....

.....

.....

.....

.....

.....

Answer hours minutes

7

Turn over ►



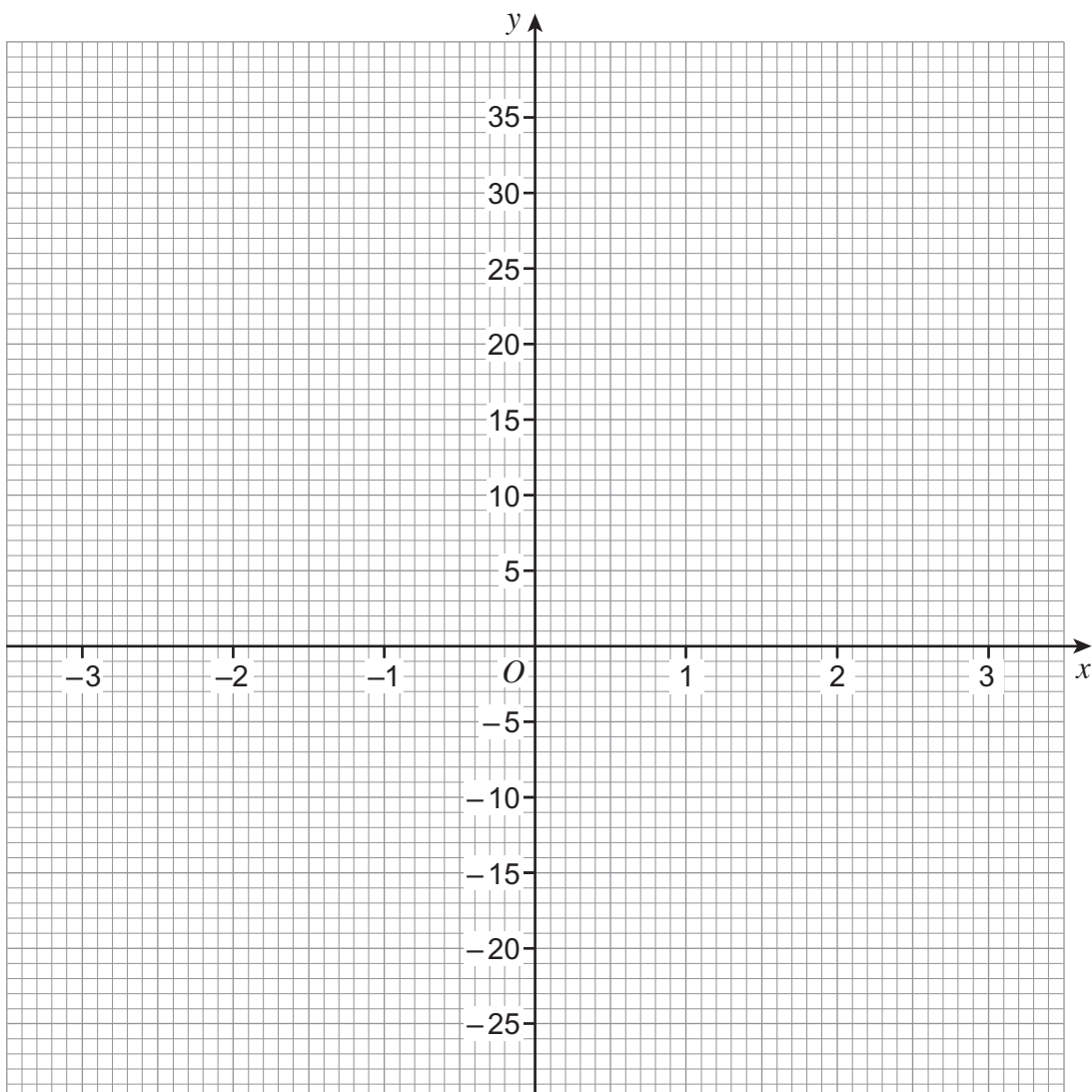
12 (a) Complete the table of values for $y = x^3 + 5$

x	-3	-2	-1	0	1	2	3
y	-22		4	5	6	13	

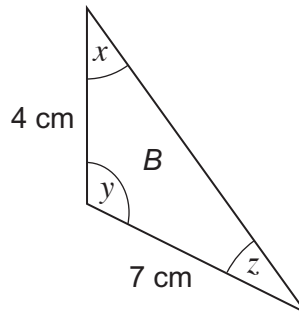
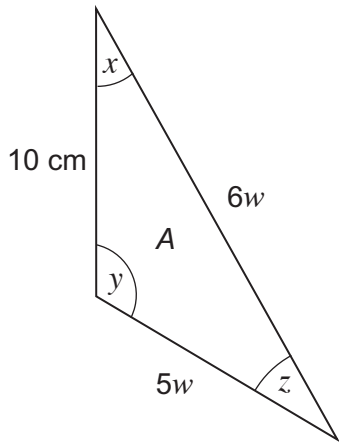
[2 marks]

12 (b) On the grid, draw the graph of $y = x^3 + 5$ for values of x from -3 to 3

[2 marks]



13 A and B are similar triangles.



Not drawn
accurately

13 (a) Circle the scale factor from A to B.

[1 mark]

- 6 $\frac{2}{5}$ $\frac{5}{2}$ 6

13 (b) Work out the perimeter of triangle B.

[4 marks]

.....

.....

.....

.....

.....

.....

.....

.....

.....

.....

Answer cm



14 (a) Which calculation works out the total amount after decreasing £50 by 8%?
Circle the correct answer.

$£50 \times 0.08$

$£50 \times 0.92$

$\frac{£50}{0.08}$

$\frac{£50}{1.08}$

[1 mark]

14 (b) Adrian is going on holiday.

He has two bags.

The mass of one bag is 9 kg

This is 45% of the total mass of the two bags.

What is the mass of his other bag?

[3 marks]

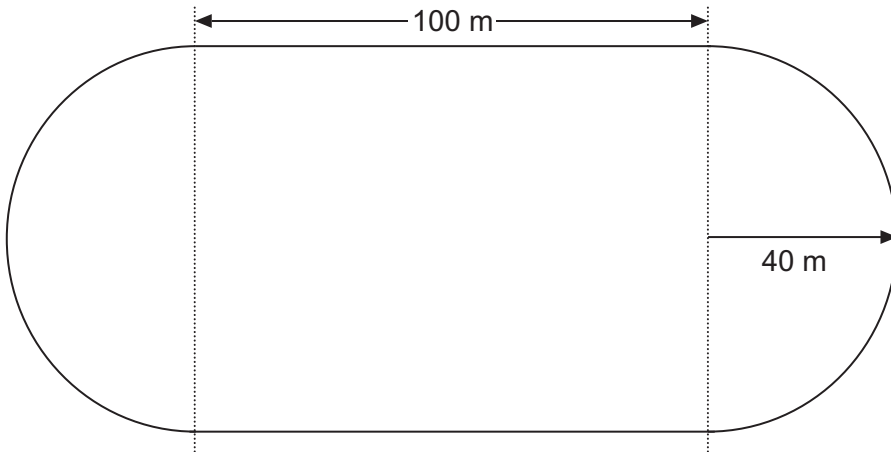
.....
.....
.....
.....
.....

Answer kg



*15

A cycle track has two identical semi-circular ends and two straight sides as shown.



Not drawn accurately

A cyclist completes one lap.

Her average speed is 18 m/s

Her target time to complete one lap is 30 seconds.

Does she beat her target?

You **must** show your working.

[4 marks]

.....

.....

.....

.....


.....

.....

Answer

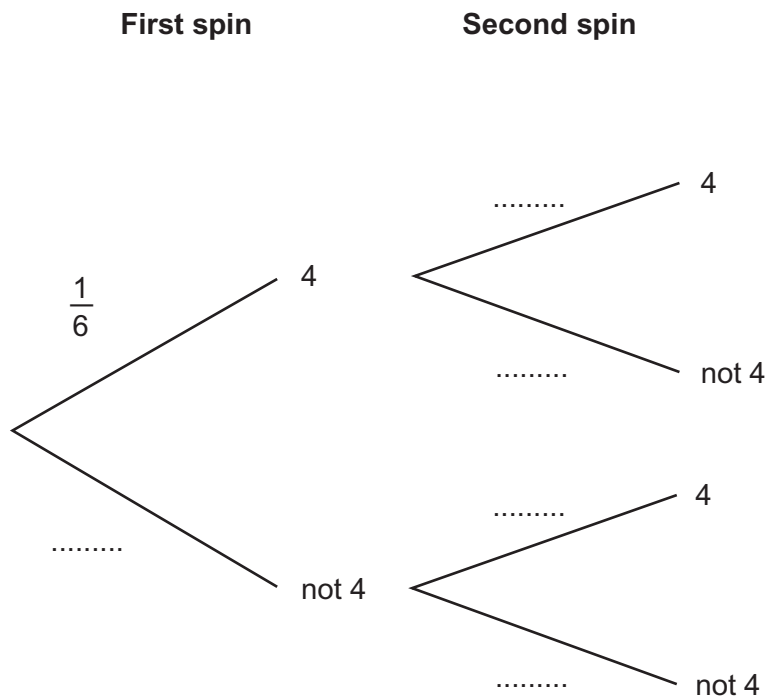


16 An ordinary fair dice is rolled.



16 (a) Complete the tree diagram for the dice landing on 4

[1 mark]



16 (b) Work out the probability of the dice landing on 4 both times.

[2 marks]

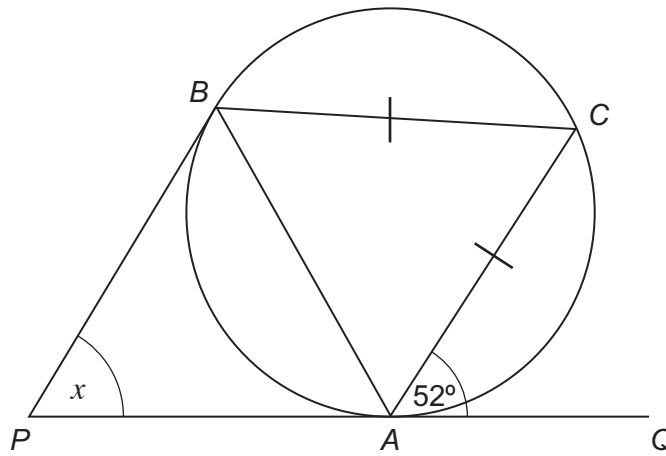
.....

Answer



17 PAQ and PB are tangents to the circle.

AC = BC



Not drawn accurately

Work out the size of angle x .
You **must** show your working which may be on the diagram.

[4 marks]

.....

.....

.....

.....

.....

.....

.....

.....

.....

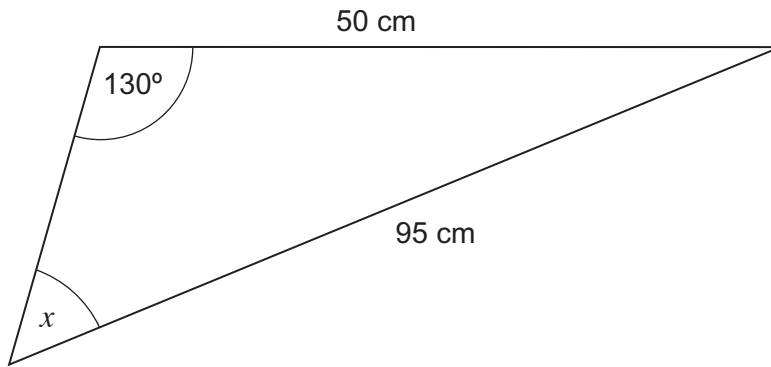
Answer degrees

7

Turn over ►



18 (a) Work out the size of angle x .



Not drawn
accurately

[3 marks]

.....

.....

.....

.....

.....

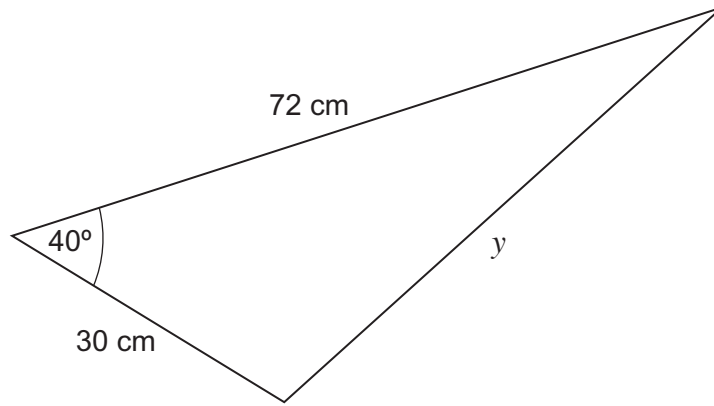
.....

.....

Answer degrees



18 (b) Work out the length y .



Not drawn
accurately

[3 marks]

.....

.....

.....

.....

.....

Answer cm

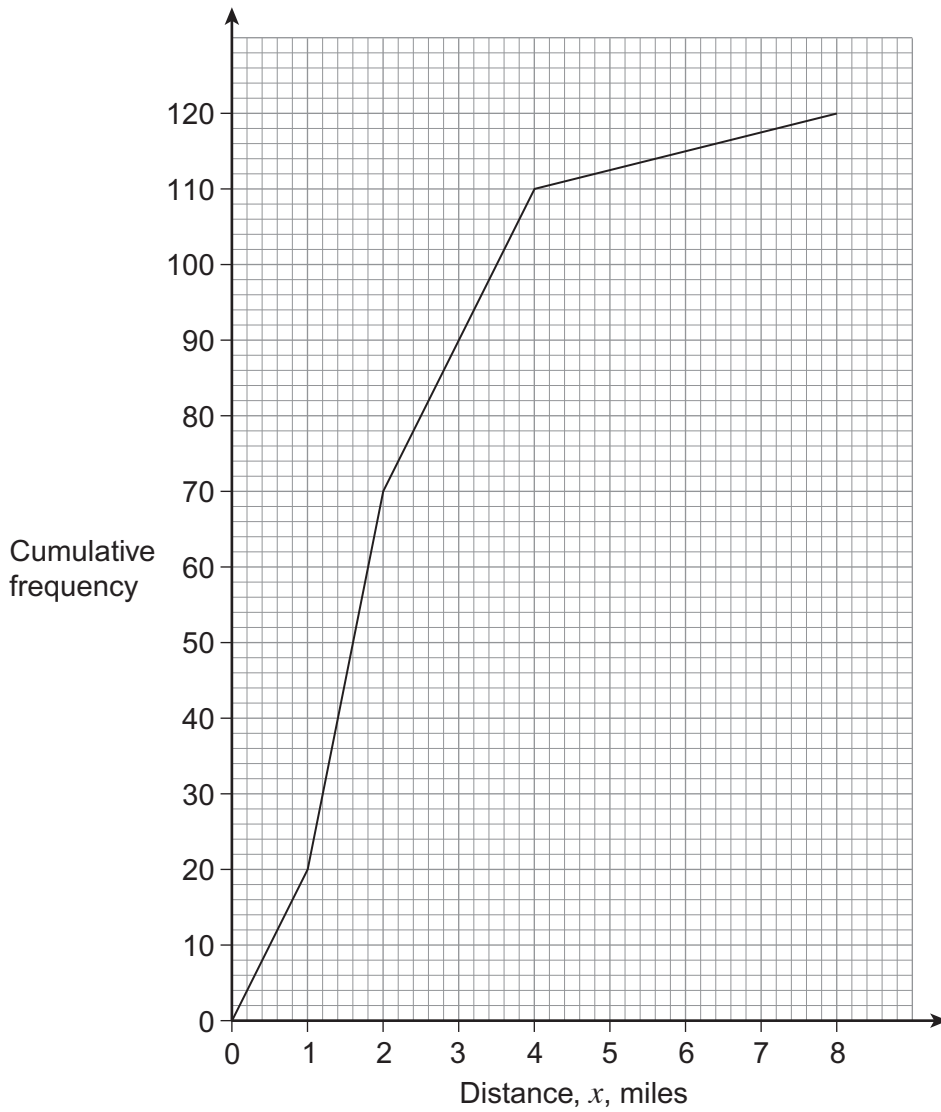
Turn over for the next question

6

Turn over ►



19 The cumulative frequency diagram shows information about the distances, in miles, that 120 students travel to school.



19 (a) Work out the interquartile range.

[2 marks]

.....

.....

.....

Answer miles



19 (b)

A sample of 25 students is taken from the 120 students.
The sample is stratified by distance travelled using the intervals below.

Distance, x, miles	$0 \leq x < 1$	$1 \leq x < 2$	$2 \leq x < 4$	$4 \leq x < 8$
--	----------------	----------------	----------------	----------------

Work out the number of students in the sample who are in the $2 \leq x < 4$ interval.

[4 marks]

.....

.....

.....

.....

.....

.....

Answer

Turn over for the next question



20 (a) Expand and simplify $(5x - 2y)(x + 2y)$

[3 marks]

.....
.....

Answer

20 (b) Solve $x^2 - 2x - 2 = 0$
Give your answers to 1 decimal place.

[3 marks]

.....
.....
.....
.....
.....
.....
.....
.....
.....
.....

Answer



20 (c) Simplify $\frac{3x^2 - x - 10}{x^2 - 4}$

[3 marks]

.....

.....

.....

.....

.....

.....

Answer

21 You are given that $x^2 + ax + b \equiv (x - 5)^2 + 7$

Work out the values of a and b .

[3 marks]

.....

.....

.....

$a =$

$b =$



- 22 70 people gave information about the number of hours they worked in one week. The table and histogram show some of that information.

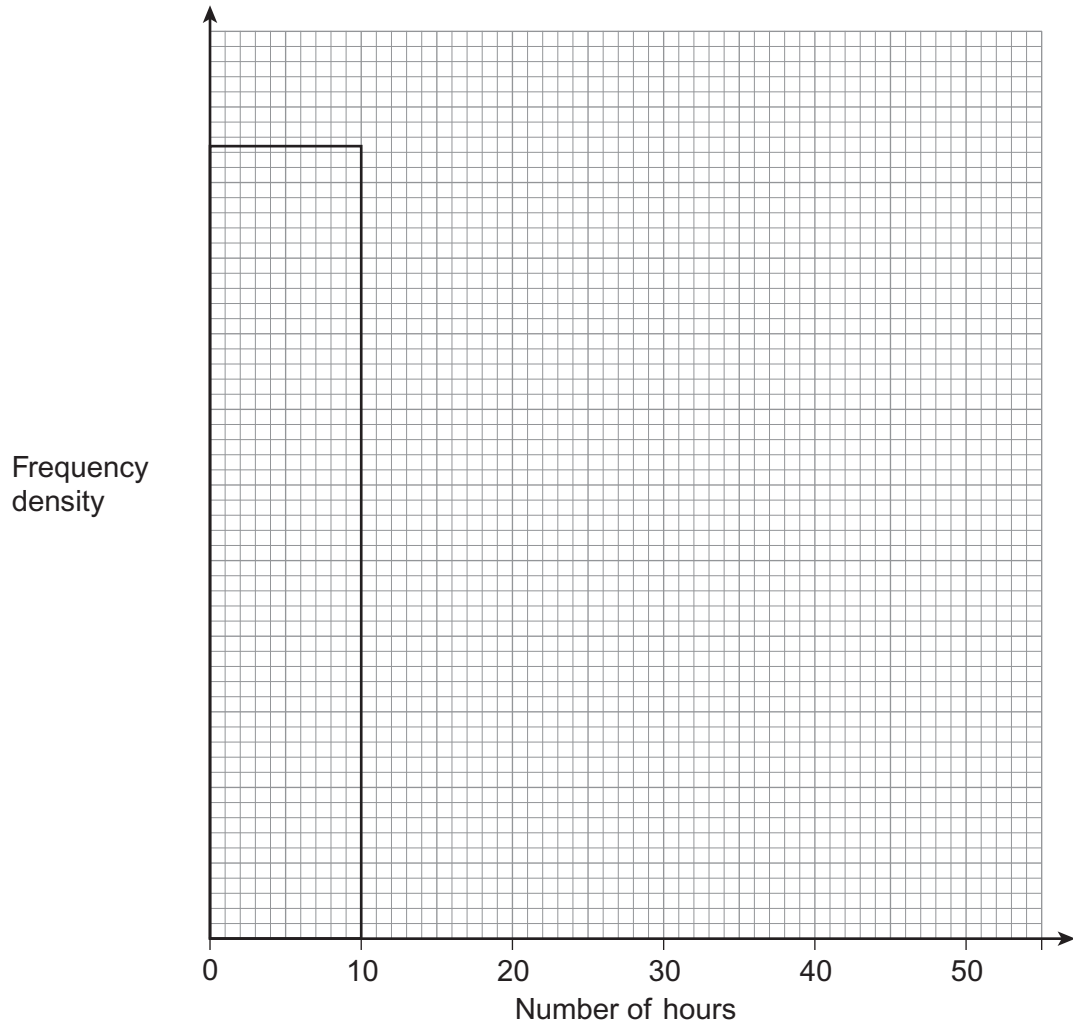
Number of hours, n	Frequency
$0 < n \leq 10$	21
$10 < n \leq 20$	x
$20 < n \leq 40$	y
$40 < n \leq 50$	17

$$x : y = 3 : 5$$

Complete the histogram.
Remember to label the **scale** on the frequency density axis.

[6 marks]





6

Turn over ►



23 Solve the simultaneous equations

$$y = 4x + 1$$

$$y = 2x^2 + 7x - 1$$

[5 marks]

.....

.....

.....

.....

.....

.....

.....

.....

.....

.....

.....

.....

.....

.....

.....

.....

.....

.....

.....

.....

.....

Answer



24

$x = 400$ to 1 significant figure.

$y = 25$ to 2 significant figures.

Work out the maximum **integer** value of $\frac{x}{y}$

[3 marks]

.....

.....

.....

.....

.....

.....

Answer

END OF QUESTIONS

8



There are no questions printed on this page

**DO NOT WRITE ON THIS PAGE
ANSWER IN THE SPACES PROVIDED**



There are no questions printed on this page

**DO NOT WRITE ON THIS PAGE
ANSWER IN THE SPACES PROVIDED**



There are no questions printed on this page

**DO NOT WRITE ON THIS PAGE
ANSWER IN THE SPACES PROVIDED**

Copyright Information

For confidentiality purposes, from the November 2015 examination series, acknowledgements of third party copyright material will be published in a separate booklet rather than including them on the examination paper or support materials. This booklet is published after each examination series and is available for free download from www.aqa.org.uk after the live examination series.

Permission to reproduce all copyright material has been applied for. In some cases, efforts to contact copyright-holders may have been unsuccessful and AQA will be happy to rectify any omissions of acknowledgements. If you have any queries please contact the Copyright Team, AQA, Stag Hill House, Guildford, GU2 7XJ.

Copyright © 2015 AQA and its licensors. All rights reserved.

